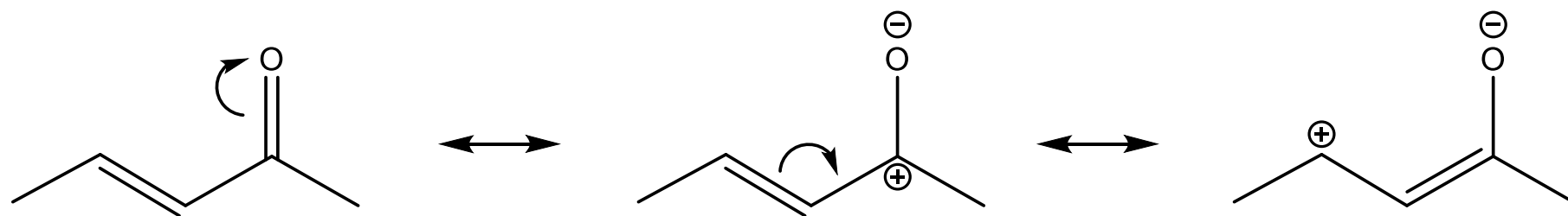


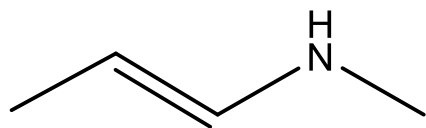
例にならって以下の化合物またはイオンa-cの共鳴構造を描け。

Draw resonance structure of the following molecule/ion(s) a-c according to the example.

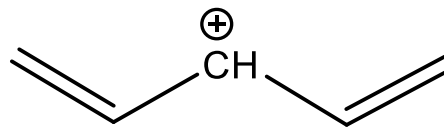
Ex.



a)



b)



c)

